





Year 5 Term 5 Home Learning



Pick and choose which activities below you would like to complete throughout the term. Please pick at least 1 per week.

Remember: For Maths you should be visiting [TT Rockstars](#) each week or Hit the Button.



| | | | | | | | | | | | | |
|--|---|---|--------------------------|---------------------|--------------------|------------------------------|-------------------|--------------------------|-----------------------|---------------------|---|---|
| <p>As it is World Ocean Day on June 8th, create a poem to highlight how amazing the ocean and the creatures are.</p>  | <p>The answer is 'explorer', what is the question?</p>  | <p>Please write out the spelling rules for: -sion, -ous and -ough.</p> <p>Challenge: Give 3 examples of them in a sentence.</p> | | | | | | | | | | |
| <p>Write out your favourite recipe - research the nutritional content of your dish.</p> <table border="1" style="width: 100%; text-align: center; font-size: 8px;"> <tr> <td>Calories 250 12%</td> <td>Fat 24g 30%</td> <td>Saturated 3.5g 18%</td> <td>Sugar 0.5 >1%</td> <td>Salt 0.8g 5%</td> </tr> <tr> <td>Energy 220 kcal 11%</td> <td>Fat 13g 19%</td> <td>Saturated 5.9g 30%</td> <td>Sugars 0.8g <1%</td> <td>Salt 0.7g 12%</td> </tr> </table> <p>What vitamins and minerals does it have too?</p> | Calories 250 12% | Fat 24g 30% | Saturated 3.5g 18% | Sugar 0.5 >1% | Salt 0.8g 5% | Energy 220 kcal 11% | Fat 13g 19% | Saturated 5.9g 30% | Sugars 0.8g <1% | Salt 0.7g 12% | <p>Find the aliens that could hold an equivalent value. How many sets of at least three can you find?</p>  | <p>Create 3 life cycle diagrams, adding their own explanations and diagrams or cutting and pasting those provided.</p>  |
| Calories 250 12% | Fat 24g 30% | Saturated 3.5g 18% | Sugar 0.5 >1% | Salt 0.8g 5% | | | | | | | | |
| Energy 220 kcal 11% | Fat 13g 19% | Saturated 5.9g 30% | Sugars 0.8g <1% | Salt 0.7g 12% | | | | | | | | |
| <p>As part of our Jigsaw piece this term, please create an internet safety poster with key points on how to stay safe online.</p> | <p>Write 5 word problems that demonstrate the relationship between fractions and decimals.</p> <p>Challenge: Write a 'how to' guide on how to compare the size of decimals using a place value chart.</p> | | | | | | | | | | | |